



# B.M. Bharti Model School

(A Senior Secondary School)  
(Recognised and Affiliated to CBSE)

Majri, Delhi – 110081



NAME OF STUDENT:

FATHER'S NAME:

CLASS:

ROLL NO.:

---

---

---

---

## CONTENT

### ENGLISH GRAMMAR

#### SECTION A: COMPREHENSION PASSAGE

Read the passage and answer the questions.

Rohan loves to play cricket. Every evening, he goes to the playground with his friends. Rohan is a good player and practices regularly. His favorite cricketer is Virat Kohli. Rohan's parents encourage him to balance studies and sports. He dreams of playing for his school team one day.

- Q1. What game does Rohan love to play?
- Q2. When does Rohan go to the playground?
- Q3. Who is Rohan's favorite cricketer?
- Q4. What do Rohan's parents encourage him to do?
- Q5. What is Rohan's dream?
- Q6. Find a noun in the passage.
- Q7. Find a verb in the passage.

#### SECTION B: SENTENCES

Q8. Find an adjective in the passage.

1. Identify the type of sentence.  
(Hint: declarative—statement, interrogative—question, imperative—command/request, exclamatory—strong feeling)

1. Please pass me the salt.
2. Where do you live?
3. I enjoy reading books.
4. What a beautiful sunset!
5. Can you help me with this?
6. Shut the door quietly.
7. He goes to school every day.
8. How exciting this trip is!

## SECTION C: NOUNS

Q2 underline the nouns in following sentences:

(Hint: person, place, thing, idea)

1. The cat is sleeping under the table.
2. Riya has a red bicycle.
3. Honesty is the best policy.
4. The children are playing football.
5. We visited the museum last week.
6. I saw stars in the sky.
7. The river flows through the valley.
8. My brother is watching a movie.

## SECTION D: PRONOUNS

Q3. Replace the underlined noun(s) with a suitable pronoun.

(Hint: I, he, she, it, we, you, they)

1. Ankit is reading a book.
- 2 The boys are playing in the park.
3. This bag is very heavy.
4. My sister and I are going shopping.
5. The dog is barking loudly.
6. The girls are singing beautifully.
7. The teacher is explaining the lesson.
8. My parents and I love going on trips.

## SECTION E: VERBS

Q4. Underline the verbs in each sentence.

(Hint: verbs show actions or states)

1. She writes a letter.
2. They are playing cricket.
3. I have finished my work.
4. The sunshines brightly.
5. He was reading a book.
6. Birds fly in the sky.
7. We will visit the zoo.
8. The baby is crying.

## SECTION F: ADJECTIVE

Q5. Circle the adjectives in these sentences.

(Hint: adjectives describe nouns)

1. She wore a beautiful dress.
2. It's a hot day.
3. He is an honest man.
4. They ate fresh fruits.
5. This is a difficult problem.
6. We saw a small kitten.
7. He has a big house.
8. We enjoyed the delicious meal.

### **SECTION G: ADVERBS**

Q6. Underline the adverbs in these sentences.

(Hint: adverbs describe verbs, adjectives, or other adverbs)

1. He runs quickly.
2. She sings very well.
3. They are waiting outside.
4. The baby is sleeping quietly.
5. I will call you later.
6. She answered politely.
7. He works hard.
8. We almost missed the train.

### **SECTION H: PUNCTUATION**

Q7. Rewrite the sentences with correct punctuation.

(Hint: use capital letters, commas, full stops, question marks, exclamation marks)

1. What is your name
2. My birthday is in july
3. Wow that's amazing
4. She said I am coming now
5. please help me
6. can we go to the park
7. yes I like chocolate
8. let's eat grandma

Activity 1: Reading is not only a fun but an experience of sailing boats of dreams to many unusual and unexplored places. Reading brings knowledge and connects one to the endless universe.

On every Monday and Thursday read a story of your choice and prepare a story review page in the given format as per the example shown here:

Day and Date	Name of the Story	The character you loved most	Theme of the story
Thursday, 23.05.2025	The Two True Friends	Alex	True friendship never fades
Moral of the Story:			
A friend in need is a friend in deed.			

Activity 2: Spare a day morning, pack your curiosity, carry your excitement, say bye to the hot Delhi vibes and land your flight of imaginations to the beautiful land of Sikkim by a virtual trip. Via link given below:

[https://youtu.be/K7IYGNxwzQA?si=TZeYktL\\_2yrgcFqY](https://youtu.be/K7IYGNxwzQA?si=TZeYktL_2yrgcFqY)

After visiting this beautiful state you must have learnt about The Cultural diversity of Sikkim. On the basis of your experience prepare the following:

Make any two stick puppets (a boy and a girl) wearing the traditional attire of Sikkim.

Figure out any two most famous dishes of Sikkim and write down the recipe of any one on an A4 size sheet.

By using any design belong to Sikkim, paint a wooden block and prepare a Fridge Magnet. (Refer to the given link for the ideas)

[https://youtube.com/shorts/8Q-G2lkLoNM?si=L-wtoL50fQp\\_2bV](https://youtube.com/shorts/8Q-G2lkLoNM?si=L-wtoL50fQp_2bV)

## हिन्दी

- सभी कार्य स्वच्छ हस्ताक्षर में अपनी कॉपी में करें।
  - दिया गया गृहकार्य अलग कॉपी में करें।
  - कार्य को समय पर व सुन्दर-सुन्दर पूरा करें।
1. प्रत्येक दिन अपनी उत्तर पुस्तिका में दिनांक सहित सुलेख लिखें।
  2. पाठ-2 “यक्ष के प्रश्न युधिष्ठिर के उत्तर” में आए 15 अन्य कठिन शब्दों को अर्थ के साथ अपनी उत्तर पुस्तिका में लिखें।
  3. अपने आसपास की किन्हीं 10 संज्ञा शब्दों को लिखो और उसकी विशेषता बताते हुए उस पर वाक्य बनाइए।
  4. “रामायण” पर आधारित भगवान राम का चरित्र चित्रण अपने शब्दों में लिखिए।
  5. प्रदूषण विषय पर चित्र सहित परियोजना तैयार करें व चार्ट बनाएँ।
  6. शब्द भंडार
    - पर्यायवाचीशब्द किनारा से पुत्री तक अपनी कॉपी में लिखें!
    - विलोम शब्द कच्चा से नीरस तक कॉपी में लिखें!
    - लोकोक्तियां 5 से 10 तक कॉपी में करें!
  7. समय का सदुपयोग करने के लिए अपने छोटे भाई को पत्र लिखिए।
  8. निम्नलिखित अपठित गद्यांश हल करें!

साहस की जिदगी रोमांचक होती है। ऐसी जिदगी की सबसे बड़ी पहचान यह है कि साहसी व्यक्ति इस बात की चिंता नहीं करता कि तमाशा देखने वाले लोग उसके बारे में क्या सोचते हैं। जनमत की उपेक्षा करके जीने वाले आदमी दुनिया की असली ताकत होते हैं और दुनिया को प्रकाश भी उसी से मिलता है। अड़ोस-पड़ोस को देखकर चलना साधारण जीव का काम है। क्रांति करने वाले लोग अपने उद्देश्य की तुलना किसी और के साथ नहीं करते और न ही वे पड़ोसी की चाल देखकर अपनी चाल को मद्धिम बनाते हैं।

प्रश्न 1. साहस की जिंदगी की क्या पहचान है?

उत्तर-\_\_\_\_\_

प्रश्न 2. कैसा व्यक्ति दुनिया की असली ताकत हो?

उत्तर\_\_\_\_\_

प्रश्न 3. साधारण लोग कैसे होते हैं?

उत्तर\_\_\_\_\_

प्रश्न 4. क्रांति करने वाले लोग कैसे होते हैं?

उत्तर\_\_\_\_\_

## कार्यपत्रिका:1

Choose the correct answer

मैं लड़का \_\_\_\_\_। (है, हो, हूँ)

तुम कौन \_\_\_\_\_? (है, हो, हूँ)

यह एक घोड़ा \_\_\_\_\_। (है, है, हूँ)

वह घर \_\_\_\_\_। (है, हो, हूँ)


वे गोपाल \_\_\_\_\_। (है, हूँ, हो)

ये बच्चे \_\_\_\_\_। (है, है, हूँ)

हम लड़कियाँ \_\_\_\_\_। (है, हूँ, हो)

आप मामाजी \_\_\_\_\_। (है, है, हूँ)

मैं सीता \_\_\_\_\_। (है, हो, हूँ)

 तुम पंडित \_\_\_\_\_। (है, हो, हूँ)

## कार्यपत्रिका:2

### कारक-भेद [CASE]

कारक-भेदों के नाम	परसर्ग/विभक्ति-चिह्न
कर्ता	ने
कर्म	को
करण	से, के द्वारा
संप्रदान	को, के लिए
अपादान	से
संबंध	का, के, की, रा, रे, री
अधिकरण	में, पर
संबोधन	हे! अरे!

**Q.1. उचित कारक-चिह्नों से निम्नलिखित गद्यांश को पूरा कीजिए।**

जो समय \_\_\_\_\_ नष्ट करता है, समय उसे नष्ट कर देता है। समय \_\_\_\_\_ सदुपयोग करने \_\_\_\_\_ असफलता \_\_\_\_\_ सामना नहीं करना पड़ता और सारे कार्य सही ढंग \_\_\_\_\_ होने लगते हैं। यहाँ तक कि धरती, सूरज, चाँद, तारे सभी समय \_\_\_\_\_ पालन करते हैं। इसलिए आइए! हम सब भी समय \_\_\_\_\_ महत्त्व \_\_\_\_\_ समझें और अपने सारे कार्य, समय \_\_\_\_\_ पूरे करने \_\_\_\_\_ कोशिश करें। हमारी यही कोशिश, जीवन \_\_\_\_\_ हमें एक कामयाब और सफल इंसान बनाएगी।

## SCIENCE

1. Create an organism of your choice that can survive in air, water as well as land. Design its body and other features that will help it to survive in all three habitats. Do it on A4 size sheet.
2. Take some leaves with reticulate & parallel venation, dry them in the folds of a newspaper for few days. When leaves are completely dry, remove the dried green part gently. You will be able to see the network of veins on the leaves. Paste them on A4 size sheet.
3. Do the Following worksheets in your science notebook :

### Worksheet -1

A. Choose the correct option.

1. What is the most needed trait to explore the world of science, as mentioned in the chapter?

- a. Intelligence
- b. Strength
- c. Curiosity
- d. Memory

2. What the first step in the scientific method as described in the chapter?

- a. Guessing a possible answer
- b. Observing something interesting
- c. Performing an experiment
- d. Analysing the results

3. In which of the following is science involved?

- a. Cooking food
- b. Playing football
- c. Growing plants
- d. All of the above

4. What is the role of an experiment?

- a. To observe the results without any manipulation
- b. To test a hypothesis
- c. To collect data without any specific purpose
- d. To ensure that all variables remain unchanged

5. What should a person do when their pen stops writing?

- a. Throw the pen away
- b. Ask a teacher for help

- c. Follow the scientific method to find out why it stopped working
- d. Use another pen without investigating

B. Fill in the blanks.

1. \_\_\_\_\_ is guessing a possible answer to that question.
2. The things we use every day all made from different \_\_\_\_\_
3. The process of asking a question, making a guess (hypothesis) and testing it is called \_\_\_\_\_
4. \_\_\_\_\_ helps us learn how materials are created and how they behave when exposed to different conditions.

C. Answer the following questions:

1. What are the three states of matter?
2. What is the process called when water turns into vapour?
3. Which planet is known as the Red Planet?
4. What gas do we breathe in to live?
5. What tool is used to measure temperature?
6. What do we call animals that live in water?
7. Which organ in your body helps you think?

## Worksheet -2

### Q.A. MCQ:

1. It has many branches at the base of its stem.  
a. Tree                      b. herb                      c. shrub                      d. climber
2. In desert plants this part of plant is often reduced to spines.  
a. Flower                      b. root                      c. leaf                      d. fruits
3. A dolphin breathes through its:  
a. Lungs                      b. gills                      c. spiracles                      d. skin
4. Aquatic habitant includes:  
a. Fresh water                      b. ocean water                      c. both a and b                      d. tap water

### Q.B Fill in the blanks:

1. \_\_\_\_\_ are small plants with green stems.
2. Shrubs are plants with \_\_\_\_\_ stem.
3. Leaves make food with the process of \_\_\_\_\_.
4. The place where organisms live naturally called its \_\_\_\_\_.

### Q.3 Write 'T' for true and 'F' for false statement:

1. Cactus is a xerophyte. \_\_\_\_\_
2. Webbed feet help ducks to swim. \_\_\_\_\_
3. Coniferous trees have big and wide leaves. \_\_\_\_\_
4. Seeds contain a baby plant in them. \_\_\_\_\_
5. Trees have a soft stem. \_\_\_\_\_

### Q.4 Answer the following questions:

1. What is adaptation? How desert plants are adapted to their surrounding?
2. Is it possible to identify the type of root by looking at the leaf of a plant? Explain with examples.
3. Why are the stems of aquatic plants flexible?
4. Write adaptive features of aquatic animals.

# SOCIAL SCIENCE

## GEOGRAPHY

Q1. Fill in the blanks-

1. \_\_\_\_\_ maps are used to provide information on specific topics.
2. A book containing many types of maps is known as An \_\_\_\_\_.
3. The lines that run from east to west on the Earth are called \_\_\_\_\_.
4. \_\_\_\_\_ has 11 time zones.
5. There are \_\_\_\_\_ time zones in the world, determined by the \_\_\_\_\_.

Q2. Draw a neat diagram of the heat zones of the Earth.

Q3. Differentiate between Parallels of Latitude and Meridians of Longitude.

Q4. Define the following-

1. Cartography
2. Sketch
3. Standard time

## HISTORY

Q1. Define the following-

1. Paleontologist
2. Century

Q2. What are the three major classifications of historical sources?

Q3. Write a short note about Bhimbetka Rock Shelters.

Q4. Discuss the significance of agriculture in transforming the lifestyle of early humans.

## CIVICS

Q1. Fill in the blanks-

1. In \_\_\_\_\_ family, members of multiple generations live together under one roof.
2. \_\_\_\_\_ is group of people who live in the same area and shares common interests, values and goals.
3. Communities are built on \_\_\_\_\_, where members support each other.
4. Jdav paying is also known as the \_\_\_\_\_.

Q2. Define community. Write it's any two features.

Q3. How do families pass down values and traditions?

Q4. Write the roles and responsibilities of members within a family.

### Holiday Homework

Q1. What are the signs and symbols used in surveying? Draw them on pastel sheets and make playcard.

Q2. Make a poster on the theme on environmental issues of Sikkim.

## संस्कृत

- सभी छात्र दिए गया समस्त ग्रीष्मकार्य कॉपी में करे !
- लिख हस एवं गच्छ धातुस्य रूपाणि लङ् लकारे, लोट लकारे एवं लृट लकारे लिखत।
- फलम्, ( नपुं ), युष्मद्, एतत्, किम् सर्वनाम शब्दरूपाणि लिखत।
- दशम भोजन व्यञ्जनानि, एवं शरीरांगा लिखत।

निर्देश:- अधोलिखितान् गद्यांशान् पठित्वा एतदाधारित प्रश्नानाम् उत्तराणि यथानिर्देशं लिखत-  
(निम्नलिखित गद्यांशों को पढ़कर इन पर आधारित प्रश्नों के उत्तर निर्देशानुसार दीजिए-)

(1) भारतस्य उत्तरस्यां दिशि हिमालयः पर्वतः अस्ति। सः भारतस्य मुकुटमणिः इव शोभते। सः शत्रुभ्यः अस्मान् रक्षति। अस्य दक्षिणपूर्व-दिशयोः समुद्रौ स्तः। सागरः भारतमातुः चरणौ प्रक्षालयति इव। अस्माकं देशे अनेके पर्वताः सन्ति। अत्र अनेकाः नद्यः प्रवहन्ति। नद्यः पानाय जलं यच्छन्ति। ताः नद्यः देशे शस्यम् अपि सिञ्चन्ति। एवं ताः अस्माकम् उदरपूरणीय अन्नं जलं च यच्छन्ति।

प्रश्न 1.हिमालयः केभ्यः अस्मान् रक्षति? (हिमालय किनसे हमारी रक्षा करता है? )

प्रश्न 2.देशे शस्य काः सिञ्चन्ति?

पूर्णवाक्येन

प्र०-1 हिमालयः भारतस्य कस्यां दिशि वर्तते?

प्र०-2 भारतस्य मुकुटमणिः इव कः शोभते?

गृहे आवश्यककार्याय दिनद्वयस्य अवकाशार्थं स्वस्य प्रधानाध्यापकाय संस्कृतभाषायां प्रार्थना-पत्रं लिखत।

उत्तरम् :

सेवायाम्,

श्रीमन्तः प्रधानाध्यापकमहोदयः

राजकीय-माध्यमिक-विद्यालयः

अलवरम् (राज.)

विषयः-अवकाशाय प्रार्थना-पत्रम्।

महोदय!

सविनयं निवेदनमस्ति यत् मम गृहे अत्यावश्यक कार्यमस्ति। अतोऽहं विद्यालये आगन्तुं न शक्नोमि। अतः

दिनांक 18-10-20XX तः 19-10-20XX ई. पर्यन्तं दिनद्वयस्य अवकाशं दत्त्वा कृतार्थयन्तु भवन्तः।

दिनाङ्कः 17-10-20xx ई.

भवताम् आज्ञापालकः

-----

कक्षा-षष्ठम् 'अ'

2-त्वम् रुग्णोऽसि, अतः स्वस्य प्रधानाध्यापकाय दिनत्रयस्य अवकाशाय संस्कृतभाषायां प्रार्थना-पत्रं लिखत।

सेवायाम्,

श्रीमन्तः प्रधानाध्यापकमहोदयः

राजकीय-माध्यमिक विद्यालयः

जोधपुरम् (राज.)

विषयः-अवकाशाय प्रार्थना-पत्रम्।

महोदय!

सविनयं निवेदनमस्ति यत् अहं ज्वरपीडया रुग्णोऽस्मि। अतः विद्यालये आगन्तुं न शक्नोमि। अस्मात्  
कारणात् दिनाङ्क 25-11-20XX तः 27-11-20xx ई. पर्यन्तं दिनत्रयस्य अवकाशं दत्त्वा कृतार्थयन्तु भवन्तः।

दिनाङ्कः 24-11-20XX ई.

भवताम् आज्ञापालक शिष्यः

-----/

कक्षा-षष्ठम् 'ब'

प्र०मम परिचयम् एवं ममप्रिय पक्षी ऊपरि पञ्चवाक्यानि लिखत!

# MATHS

## WORKSHEET-1

Question 1) Very short questions:-

1. Which one is smaller 5428 or 5425?
2. Which one is greater 6809 or 6807?
3. Find the value of  $82 \times 14 - 82 \times 12$ .
4. How many whole numbers are less than 10?

Question 2) Fill in the blanks:-

1. The smallest natural number is \_\_\_\_\_.
2. Counting numbers are called \_\_\_\_\_.
3. The place value of \_\_\_\_\_ is always zero.
4. Sixth place is called \_\_\_\_\_ place.
5. The largest 6 digit number is \_\_\_\_\_.

Question 3) Choose the correct answer:

1. The statement  $4 + (5 + 7) = (4 + 5) + 7$  is called property of
  - a. Commutative
  - b. Closure
  - c. Associative
  - d. None of these
2. The sum of two odd whole number is.
  - a. An even number
  - b. An odd number
  - c. A prime number
  - d. None of these
3. The difference between smallest natural number and smallest whole number is.
  - a. 0
  - b. 1
  - c. 10
  - d. 9
4. The value of  $0 \div 3$  is
  - a. 0
  - b. 3
  - c. 1
  - d. None of these

Question 4) Find the value of  $2575 \div 25 - 2575 \div 2575$ .

Question 5) Find the product with suitable properties.  $(200 \times 105)$   $(1245 \times 123)$

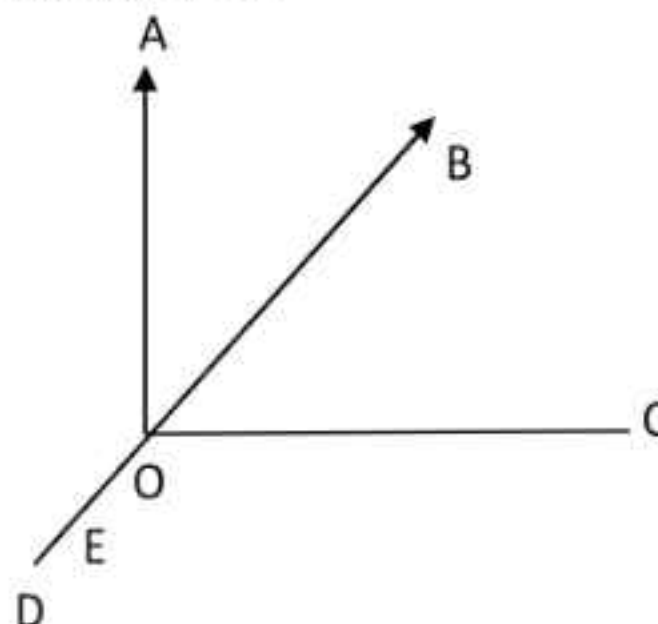
Question 6) Sneha work part time in a café, She works 4 hours on Saturday and 3 hour on Sunday. If she earn ₹55 per hour, how much did she earn on these two days?

Question 7) There are 1250 students in a school. If 25 students stand in each row during Morning assembly, Then find the number of rows.

Question 8) Find the value of  $82 \times 14 + 82 \times 12$ .

Question 9) Use the figure to name:

- a. Five points
- b. A line
- c. Four rays
- d. Five line segments



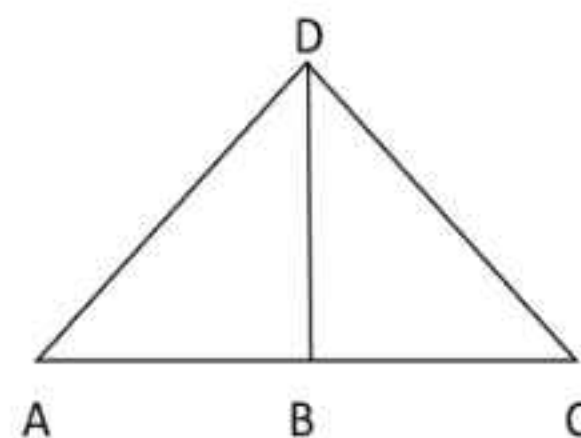
Question 10) Find the diameter of the circle whose radius is a. 4CM b. 7.5CM c. 12CM

Question 11) Fill in the blanks

- 1. A dot gives an idea of \_\_\_\_\_.
- 2. An edge of a ruler gives us an idea of \_\_\_\_\_.
- 3. A wall gives us an idea of \_\_\_\_\_.
- 4. Two line lying in a plane \_\_\_\_\_ if they are not parallel to each other.
- 5. Three or more points are \_\_\_\_\_ if they lie on a plane.

Question 12) In the following figures: -

- 1. Identify three triangles
- 2. Write the name of seven angles
- 3. Write the name of six line segments
- 4. Which two triangle have angle a as common angle.



### WORKSHEET-2

Question 1)

- (i) Define whole number
- (ii) Natural number
- (iii) Prime number
- (iv) Composite number

(v) Even number

(vi) Odd number

Question 2) Find the all the factors of 36.

Question 3) Write five 5 multiples of 12.

Question 4) Is 91 a prime number? Why or why not?

Question 5) Write  $\frac{3}{4}$  as a decimal.

Question 6) Add  $\frac{6}{5} + \frac{7}{9} + \frac{3}{2}$ .

Question 7) Subtract  $378.5 + 29.5$ .

Question 8) Divide  $2.48 \div 3$ .

Question 9) Name the type of triangles based on sides.

Question 10) How many sides does a hexagon have?

Question 11) What is the name of 3D shape with 6 square faces?

Question 12) Divide:-

1.  $6987321 \div 243$

2.  $79839967 \div 123$

3.  $798326 \div 74$

4.  $8432654 \div 95$

5.  $8932657 \div 241$

Question 13) Multiply:-

1.  $678932 \times 679$

2.  $798735 \times 6793$

3.  $893265 \times 79834$

Question 14) Simplify:-

1.  $12 + 36 \div 6 \times 2 - (4 + 2)$

2.  $64 \div 8 + 123 + 49 + (79 - 2)$

3.  $36 \div (9 - 3) + 5 + 49$

4.  $50 \div 5 \times (3 + 26)$

Question 15) Write the following in words international.

1. 92, 453, 610

2. 70, 256, 967

3. 50, 00, 000

Question 16) Write the place value and the face value of the underlined digits and add them,

1. 9, 34, 567

2. 8, 50, 023

3. 4, 03, 265

Question 17) Solve:-

1.  $\frac{68}{4} + \frac{2}{9}$     2.  $\frac{71}{4} + \frac{2}{5}$     3.  $\frac{41}{3} - \frac{19}{2}$     4.  $\frac{48}{7} \div \frac{7}{9}$     5.  $\frac{4}{7} \times \frac{81}{7}$     6.  $\frac{6}{7} \times \frac{81}{7}$

Project:- On A4 size sheet show all the points of basic geometrical concept (with using waste material) decorate it.

Like- Ray, Plane, Collinear etc.

## COMPUTER

- DRAW ANY FOUR TYPES OF MICRO COMPUTER AND EXPLAIN IT ON A3 SIZE SHEET  
(ROLL NO: 1 TO 15)
- PASTE PICTURES OF SUPER COMPUTER, MAINFRAME COMPUTER, MINI COMPUTER, MICRO COMPUTER AND WRITE THE SIZE AND SPEED IN FRONT OF EACH COMPUTER ON A3 SIZE SHEET.  
(ROLL NO: 16 TO ABOVE)
- LEARN CHAPTER-1 AND 2 ( QUESTION-ANSWER AND BOOK WORK)

## GENERAL KNOWLEDGE

- Do worksheet in your G. k. Notebook.

Ques -1 Write the name of ten musical instruments and Paste their pictures.

Ques -2 Write the name of ten great persons of India with their actual name and paste their pictures.

Ques -3 Write Top ten news of June.

Ques -4 Write the name of ten sports stars with their associated games and also paste their pictures.

## DRAWING

### ACTIVITY –

- 1) MAKE A CHERRY BLOSSOM PRINT USING A PLASTIC BOTTLE AS A STAMP.
  - START BY COLLECTING EMPTY PLASTIC BOTTLE.
  - DEEP THE END INTO PAINT MAKING SURE TO COVER THE FIVE POINTS THAT MAKE THE PETALS
  - PRESS THE END OF THE BOTTLE ONTO PAPER TO TRANSFER YOUR PETAL PRINTS
  - ADD VARIETY BY USING DIFFERENTS SIZED BOTTLE TO CREAT UNIQUE PRINT
- 2) MAKE FIVE PAINTING OF YOUR CHOICE  
(EACH ON DIFFERENT SHEET)

**ACTIVITY: PREPARE A BAG OUT OF THESE MATERIAL- JUTE, CLOTH OR PAPER.**