



B.M. Bharti Model School

(A Senior Secondary School)
(Recognised and Affiliated to CBSE)

Majri, Delhi – 110081

SUMMER HOLIDAY'S HOMEWORK SESSION: 2025-26 CLASS: V



NAME OF STUDENT:

FATHER'S NAME:

CLASS:

ROLL NO.:

CONTENT

ENGLISH

1. My Book Nook:

- Read a story of your activity book during the holidays and complete sparkle activity 1 and 2 in book.

2. Newspaper Navigator:

- Every day for one week, read a newspaper (with the help of an adult if needed).
- For each interesting article, write one sentence telling what the news is about.

3. Do 15 writing during holidays to improve your writing skills.

4. Vocabulary Voyage:

- Word Wonders: Learn 20 new words during the holidays. You can find them in your books, newspapers, or even ask your family.
- For each new word, write down:
 - The word itself.
 - Its meaning (you can use a dictionary).
 - A sentence using the word.

5. Project work will be done according to roll number:

- Make a Hand puppet with old socks. (ROLL NO 1-7)
- Write some Do's and don'ts on zoo manners. Do on A4 sheet. (ROLL NO 8-14)
- Use your creativity and write about sentences- it's kinds (gr. Ch-1). Do on A3 sheet. (ROLL NO 15-21)
- Use your creativity and write about parts of speech (gr. Ch-2). Do on A3 sheet. (ROLL NO 22-28)
- Use your creativity and write about modals verbs (gr. Ch- 8). Do on A3 sheet. (ROLL NO 29-35)

WORKSHEET NO-1

Worksheet will be done in class notebook (Grammar Portion)

Instructions: Read each question carefully and answer to the best of your ability.

1. Nouns:

a) Underline the nouns in the following sentences:

i) The dog barked loudly at the mailman.

ii) Delhi is a big city.

iii) My mother gave me a new book.

b) Write one common noun and one proper noun:

Common Noun: _____

Proper Noun: _____

2. Pronouns:

a) Fill in the blanks with suitable pronouns:

i) _____ went to the park yesterday. (I/Me)

ii) The cat chased _____ tail. (its/it's)

iii) Can you help _____ with this problem? (I/me)

b) Replace the underlined noun with a suitable pronoun:

i) Rohan is a good boy. _____ always helps others.

3. Verbs:

a) Circle the verbs in the following sentences:

i) The birds fly in the sky.

ii) She is reading a story.

iii) They played football in the evening.

b) Fill in the blanks with the correct form of the verb given in brackets:

i) My sister _____ (go) to school every day.

ii) We _____ (watch) a movie last night.

WORKSHEET NO-2

1. Adjectives:

a) Underline the adjectives in the following sentences:

- i) She wore a beautiful dress.
- ii) This is a heavy box.
- iii) The clever fox outsmarted the hunter.

b) Fill in the blank with a suitable adjective:

- i) The elephant is a _____ animal.

2. Articles (a, an, the):

Fill in the blanks with the correct article:

- i) I saw _____ elephant in the zoo.
- ii) She is _____ honest girl.
- iii) _____ sun rises in the east.

3. Prepositions:

Fill in the blanks with suitable prepositions:

- i) The book is _____ the table.
- ii) The cat jumped _____ the chair.
- iii) The school is _____ the post office and the library.

4. Conjunctions (and, but, or):

Join the following sentences using the given conjunction:

- i) She likes to sing. She also likes to dance. (and)

- ii) He is rich. He is not happy. (but)

- iii) Do you want tea? Do you want coffee? (or)

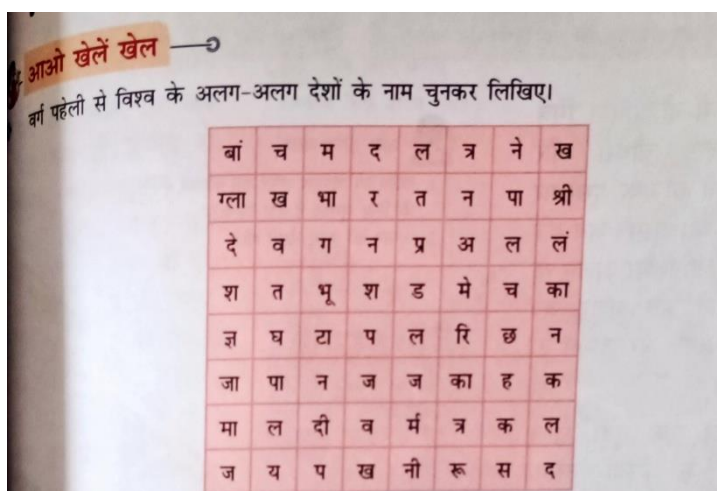
हिंदी

- 15 सुंदर सुलेख कॉपी में कीजिए ! (सुलेख की कॉपी पर)
- लिखावट उचित और स्पष्ट होनी चाहिए !

प्रश्न1) सम्राट अशोक का चित्रचिपकाकर उनके विषय में पांच वाक्य लिखिए। (A-3 size sheet पर)

प्रश्न2) यदि आप किसी यात्रा के समय अपने मम्मी पापा से अलग हो जाएं, तो आप क्या-क्या सावधानियां रखेंगे? सोच कर लिखिए। (स्क्रैप फ़ाइल में)

प्रश्न3) वर्ग पहेली से विश्व के अलग-अलग देशों के नाम चुनकर लिखिए !



_____	_____
_____	_____
_____	_____
_____	_____
_____	_____


प्रश्न 4) दिए गए चित्र का वर्णन कीजिए और प्रयोग किए गए सर्वनाम शब्दों को रेखांकित कीजिए।



कार्यपत्रिका -1

हमारी भाषा एवं वर्य

प्रश्न 1 नीचे दिए गए चित्रों में भाषा के कौन-से रूप का प्रयोग किया गया है –



प्रश्न 2 निम्नलिखित भाषाओं के सामने उनकी लिपि लिखिए-

हिंदी:- _____

तमिल:- _____

अंग्रेजी:- _____

जर्मन:- _____

संस्कृत:- _____

जापानी:- _____

पंजाबी:- _____

फ्रेंच:- _____

प्रश्न 3समुचित शब्दों से रिक्त स्थान भरिए-

- (क) विचारों को लिखकर एक-दूसरे तक पहुँचाना _____ भाषा है। (मौखिक/लिखित)
- (ख) अपने विचारों को बोलकर प्रकट करना _____ भाषा है। (लिखित/मौखिक)
- (ग) भाषा को लिखने के लिए प्रयोग किए गए लेखन-चिह्नों को _____ कहते हैं। (भाषा/लिपि)
- (घ) व्यंजनों का उच्चारण _____ की सहायता के बिना नहीं हो सकता। (स्वरो/भाषाओं)
- (ङ) किसी भाषा के सभी वर्णों के क्रमबद्ध समूह को _____ कहते हैं। (वर्ण-विचार/वर्णमाला)

कार्यपत्रिका -2

(विशेषण एवं क्रिया)

प्रश्न1. सही उत्तर पर (✓) का चिन्ह लगाओ।

क. सफेद घोड़ा दौड़ रहा है। रेखांकित विशेषण है-

गुणवाचक () सार्वनामिक () परिमाणवाचक ()

ख. चार किलो आटा खरीदो। रेखांकित शब्द है-

विशेषण () विशेष्य () अन्य ()

ग. मोनिका लिख रही है। वाक्य में क्रिया है-

लिख रही () मोनिका () है ()

घ. राम कहानी _____ है। रिक्त स्थान की पूर्ति करें

पढ़ता () पढ़ लेगा () पढ़ो ()

प्रश्न 2 निम्नलिखित शब्दों में से विशेषण शब्द छांट कर लिखिए।

क. लाल फूल _____

ख. सुंदर भवन _____

ग. ठंडा पानी _____

घ. दो किलो चीनी _____

ड. गरम चाय ____

प्रश्न 3 नीचे दिए गए वाक्यों में से विशेषण शब्द छांटकर सामने लिखिए।

क. गंदे पानी में नहीं नहाना चाहिए। _____

ख. माला के लिए थोड़े फूल चाहिए। _____

ग. हलवाई ने दस लीटर दूध खरीदा। _____

प्रश्न 4 दिए गए उचित शब्दों से रिक्त स्थान भरिए- (पहले, विशेष्य, विशेषण, वाक्य, क्रिया)

क. संज्ञा या सर्वनाम की विशेषता बताने वाले शब्दों को ____ कहते हैं।

ख. जिस संज्ञा या सर्वनाम की विशेषता बताई जाए, उसे ____ कहते हैं।

ग. विशेषण कभी विशेष्य से ____ आता है, कभी बाद में।

घ. जिस शब्द से वाक्य में किसी कार्य के किए जाने या होने का बोध हो, उसे ____ कहते हैं।

ङ क्रिया के बिना कोई ____ पूरा नहीं होता है।

SOCIAL SCIENCE

1. Collect information and create a report on a Historical site in India Akshardham (NewDelhi) or Ram Mandir(Ayodhya)
2. include details about the history,significance, architecture and any interesting facts about the place.
3. Collect different types of soil (black soil,Alluvial soil, laterite soil in your surroundings in small pouches and write about its composition, properties and uses in scrap book.
4. 3) Collect pictures of plants and animals that live in desert and paste them in a scrap book.
5. Draw and explain the following in scrap book
 - A. Latitudes
 - B. Longitudes
 - C. Grid

WORKSHEET

Topic - Weather and Climate

I. Let's see if you know-

1. The study of weather is known as M ____ Y.
2. The layer of air surrounding the earth is called A ____ E.
3. The height of a place above sea level is known as A ____ E.
4. Very hot summers and very cold winters are called E ____ E climate.
5. Places near the sea coast have M ____ E climate.

II. Unscramble the following letters to form the correct word:

1. This is the coldest zone (FIIGDR)
2. This is the hottest zone (ORITDR)
3. This affects the climate of a place (UMIHDYTI)
4. This zone lies between the Tropics and the Poles (EMTERPATE)



III. Now find out -

1. The wettest place in the world -

2. The hottest place in India -

3. The coldest place in India -

IV. Name any five popular hill stations in India and write which state they are in -

Example: Munnar-Kerala

SCIENCE

A. Prepare any of these

1. Make a first aid box for your classroom! Take a plastic box with a lid. Stick a list of emergency phone numbers on its side. Keep 6-7 items in it like: -

- Bandages
- Antiseptic cream
- A small roll of cotton
- Scissors and some safety pins
- A bottle of antiseptic liquid such as dettol or savlon
- Sticky plaster (such as Band -Aid)

Or

2. Make beautiful poster on A3 sized sheet on each of the following: -

- Prevention of fire accident.
- Types of habitats
- Labelled diagram of skeletal system

B. Read chapter 3 (safety and first aid) and chapter 4 (rocks and minerals), mark their difficult words at least 12 from each chapter and write their meaning in your fair notebook.

WORKSHEET 1: Safety and First Aid

INSTRUCTION:- Read the chapter "Safety and First Aid" and give answer to the questions given below related to the chapter.

A. Fill in the blanks

1. We should not play with _____ and sharp objects.
2. _____ is the first help given to an injured person.
3. Do not touch _____ wires.
4. We should call _____ in case of an emergency.
5. A person who is unconscious should be kept lying on his _____.
6. Always keep a _____ box at home and in school.

B. Choose the correct answer

1. What should you do for a small burn?
a. Put butter b) Use ice directly c) Wash with cold water
2. First aid helps:
a. Cure diseases b) Give rest c) Stop further harm
3. Which of these is NOT safe?
a. Running on stairs b) Using zebra crossing c) Wearing a helmet
4. If someone is bleeding, you should:
a. Ignore it b) Clean and cover the wound c) Leave the wound open

C. True or False

1. You should panic in an emergency. _____
2. First aid can save lives. _____
3. You should play with electrical switches. _____
4. A bandage is used to tie books. _____
5. You should stay calm and ask an adult for help. _____

D. Match the following

- | | |
|-------------------|--------------------------------|
| 1. Zebra crossing | a. pinch your nose |
| 2. Cut on skin | b.to cross the road |
| 3. Burnt a finger | c. apply bandage |
| 4. Nose bleeding | d. put the winter in the water |

E. Short Answer Questions

- 1.What is first aid?

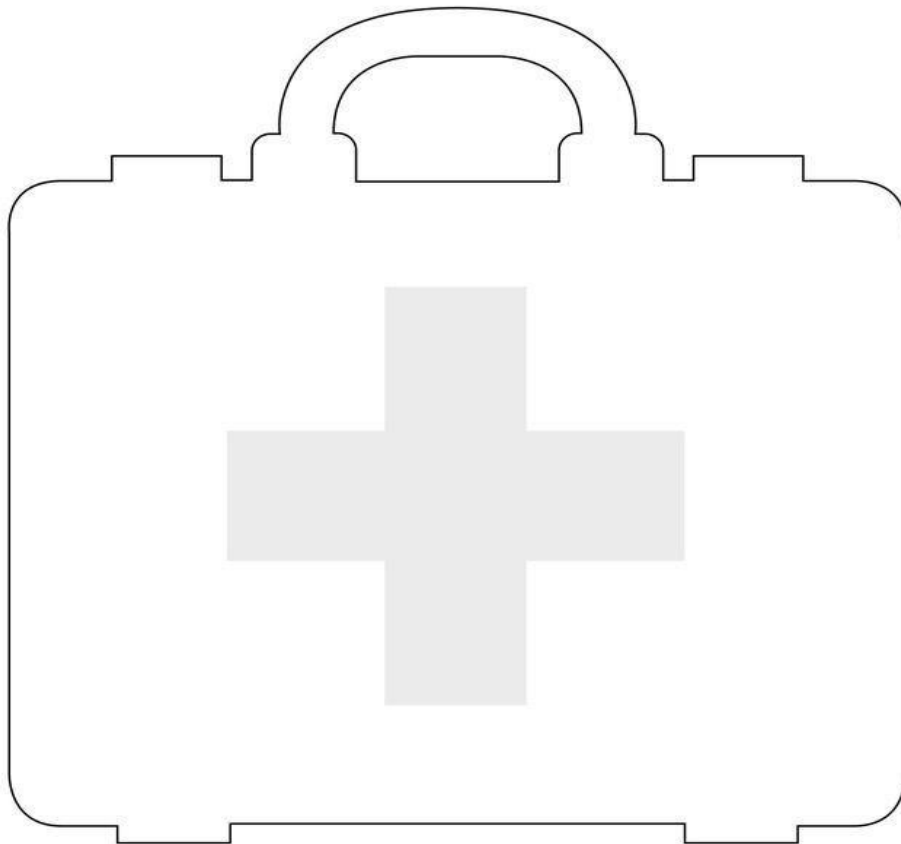
2.Name any two items in a first aid box

3.What should you do if your friend falls and gets hurt?

Name: _____

FIRST AID KIT

Direction: Draw or stick pictures of what you think should be inside a first aid kit inside this empty one.



WORKSHEET 2:
Rocks and Minerals

A. Fill in the blanks

1. Rocks are made of small substances called _____.
2. _____ is a soft rock used to make chalk.
3. Bricks and cement are made from _____.
4. Minerals from which metals can be extracted are called _____.
5. _____ is used to make statues and floors.

B. Choose the correct answer:

1. Which of these is a mineral?
a) Diamond b) Water c) Air
2. What is sandstone used for?
a) Writing b) Building c) Cooking
3. Which of the following is a use of minerals?
a) Eating b) Making jewellery c) Growing

C. True or False:

1. All rocks look the same. _____
2. We get metals from minerals. _____
3. Granite is used for making jewellery. _____
4. Chalk is made from limestone. _____
5. Rocks do not break easily. _____

D. Short Answer Questions

1. Define igneous rocks.

2. Name the types of Rocks.

3. Draw the Mind map of rocks.

MATHS

WORKSHEET-1

Q.1 Write the following in short form: -

a) $900000 + 70000 + 1000 + 200 + 10 + 4 =$ _____

b) $30000000 + 2000000 + 100000 + 50000 + 7000 + 300 + 40 + 7 =$ _____

Q.2 Write predecessor and successor of each: -

(i) 6,73,87,915

(ii) 51,74,67,908

Q.3 -

(i) Arrange in ascending order: -

7504020, 750420, 954002, 7540378

(ii) Arrange in descending order: -

7504020, 750420, 954002, 7540378

Q.4 Insert commas and compare '>', '<' or

(i) 4275850 4275805

(ii) 7404897 7403847

Q.5 Round off following numbers to nearest 1000

(i) 840560

(ii) 2150500

Q.6 Write the answer in Roman Numerals: -

(i) XLV+LV = _____

(ii) XCII-III = _____

(iii) XLVIII + XVI = _____

Q.7 Find the missing digit: -

$$\begin{array}{r} \text{(i)} \quad 4 \ 3 \ \bigcirc \ 9 \ 1 \ 2 \\ \quad \quad 3 \ 2 \ 8 \ \bigcirc \ 3 \ 2 \\ + \quad 2 \ 1 \ 5 \ 6 \ \bigcirc \ 5 \\ \hline 9 \ \bigcirc \ 0 \ 6 \ 6 \ 9 \end{array}$$

$$\begin{array}{r} \text{(ii)} \quad 6 \ \bigcirc \ 5 \ \bigcirc \ 6 \ \bigcirc \ 0 \\ - \quad \bigcirc \ 3 \ \bigcirc \ 7 \ \bigcirc \ 2 \ \bigcirc \\ \hline 2 \ 0 \ 4 \ 5 \ 3 \ 7 \ 2 \end{array}$$

Q.8 Add: -

$$\begin{array}{r} \text{(i)} \quad 1 \ 7 \ 2 \ 5 \ 7 \ 5 \ 2 \\ + \quad 2 \ 4 \ 5 \ 5 \ 4 \ 0 \ 1 \\ \hline 1 \ 7 \ 8 \ 9 \ 5 \ 4 \ 3 \\ \hline \end{array}$$

$$\begin{array}{r} \text{(ii)} \quad 6 \ 2 \ 4 \ 7 \ 0 \ 9 \ 8 \\ + \quad 4 \ 0 \ 2 \ 7 \ 3 \ 6 \ 0 \\ \hline \end{array}$$

Q.9 Subtract: -

$$\begin{array}{r} \text{(i)} \quad 1 \ 0 \ 1 \ 0 \ 1 \ 0 \ 1 \ 0 \\ \quad - 2 \ 6 \ 3 \ 5 \ 8 \ 4 \ 5 \\ \hline \end{array}$$

$$\begin{array}{r} \text{(ii)} \quad 8 \ 3 \ 5 \ 3 \ 4 \ 0 \\ \quad - 3 \ 8 \ 4 \ 9 \ 4 \ 5 \\ \hline \end{array}$$

Q.10 Multiply the following: -

$$\text{(i)} \quad 75884 \times 384$$

$$\text{(ii)} \quad 247458 \times 600$$

Q.11

$$\text{(i)} \quad \text{Divide } 58648 \text{ by } 27$$

$$\text{(ii)} \quad \text{Divide } 443588 \text{ by } 42$$

WORKSHEET 2

Q.12 Simplify: -

$$61\{(35+34) \div (46-23)\}$$

Word Problems

Q.13 36 trucks can carry 1935216 kg of wheat. How much wheat can be carried by one truck.

Q.14 Find the product of 333 and the sum of 2857 and 4005.

Q.15 How many hours are there in one month?

Q.16 What should be added to 553065 to get 1000000?

Q.17 A computer and printer both cost ₹ 33,495. Find the cost of the computer.

Q.18 A factory produced 6247098 fans in 2014 and 4027360 fans in 2015. Find the total number of fans company produced in these two years.

Q.19 Find the product of largest 3 – digit number and smallest 6 -digit number.

1. Write tables from 2 to 20.

ACTIVITY-Make a 3D shape model.

Basic material required:

Cardboard or Paper, Scissor, Glue or Tape And Ruler or Pencil For drawing and cutting.

- Tips for building the model:
- Choose simple 3D shapes like cubes, sphere cones and cylinder to begin.
- Draw and cut:
- Use the ruler and pencil to accurately draw the shapes and then cut them out using scissors or a craft knife.
- Fold and glue:
For shapes like cube, cone, sphere, cylinder you can fold the cut-out pattern and use glue to create the 3D structure.
- Label and decorate:
Label each shape with its name.

COMPUTER

- Prepare a poster on A3 size sheet, draw the table - generation of computer, including Name, Time, Language used and examples.
- Prepare a document on MS Word evaluation on 'Evolution of Computer ' write at least 2 line on each of the computer:- Abacus, Napier's Bones, Pascaline Calculator, Leibniz Calculator, Difference engine, Analytical engine, Tabulating machine, Mark I , ENIAC , EDVAC , UNIAC I.
- Use word art, Shapes, pictures, smart art and clip art to make your document more attractive.
- Read chapter 3 and try to fill the book work by your own.

GENERAL KNOWLEDGE

1. Write the name of ten countries and their national games in your G.k. notebook .
2. Write top ten news of June in your G.k. notebook.
3. Write the name of ten countries with their capital in your G.k. notebook .
4. Write the name of ten sports stars with their associated games and also paste their pictures in your G.k. notebook.



DRAWING

- **Paper Folding**
 - * Dog Craft
 - * Dinosaur Hatching Craft
- **Draw any one of them:**
 - File work
 - 1. Make a scenery of your imagination
 - 2. Two birds sitting on a tree
 - 3. Pencil shading - any 2 fruits
 - 4. Make 4 vegetables With your thumb impression