



B.M. Bharti Model School

(A Senior Secondary School)
(Recognised and Affiliated to CBSE)

Majri, Delhi – 110081

**SUMMER
HOLIDAY'S HOMEWORK
SESSION: 2025-26
CLASS: III**




NAME OF STUDENT: _____

FATHER'S NAME: _____

CLASS: _____

ROLL NO.: _____

DEAR PARENTS



Greetings from B.M Bharti model School!

- ENCOURAGE YOUR CHILD TO MAKE THE SURROUNDINGS NEAT, CLEAN AND GREEN.
- EAT HEALTHY FOOD.
- DO 20 MINUTES YOGA/DANCE/RUNNING AT HOME UNDER THE PARENTS SUPERVISION. (MORNING/EVENING)
- TRAIN YOUR CHILD TO GET UP EARLY AND TELL THEM TO WISH YOUR PARENTS.
- CLICK PICTURES OF YOUR WARD WHILE THEY PERFORM THE GIVEN ACTIVITIES AND SEND IT TO THEIR CLASS TEACHERS.
- DON'T TAKE THESE ACTIVITIES AS BURDEN BUT ENJOY THEM AND GIVE YOUR BEST.
- ENJOY YOUR HOLIDAYS. STAY SAFE AND HEALTHY.

THANK YOU!



CONTENT

ENGLISH-

- DO READING PRACTICE FROM NEWSPAPER OR BOOK ON DAILY BASIS AND WRITE TWO NEW WORDS WITH THEIR MEANING (HOLIDAY'S HOMEWORK NOTEBOOK)
- MAKE A THANKYOU CARD FOR YOUR FATHER ON THE OCCASION OF FATHER'S DAY AND WRITE A MESSAGE INSIDE IT
- MAKE A JOURNAL (IN ABOUT 6-7 PAGES) ABOUT YOUR HOLIDAYS EXPERIENCES

MATHS-

- USING ROMAN NUMBERS (ROLL NO. 1 TO 14) MAKE A LIST OF YOUR 4 FRIENDS BIRTHDAY DATES
- (ROLL NO. 15 TO 28) MAKE A LIST OF YOUR 4 FRIENDS ROLL NO. IN THE CLASS
- CREATE A BEAUTIFUL SCRAP BOOK OF TABLES 2 TO 15
- FIND THE HEIGHT OF 5 HIGHEST MOUNTAIN PEAKS IN THE HIMALAYAN RANGE IN INDIA. ARRANGE THEM IN ASCENDING AND DESCENDING ORDER

E.V.S-

- BRAIN STORM WAYS TO RECYCLE HOUSEHOLD ITEMS AND CREATE A LIST
- ON A3 SIZE SHEET MAKE A BALANCE DIET CHART
- MAKE A POSTER ON WORLD ENVIRONMENT DAY ALSO WRITE A SLOGAN
- RESPECT IS THE GREATEST GIFT WE CAN GIVE TO SOME ONE, MAKE A THANKYOU CARD FOR ANYONE OF THE COMMUNITY HELPER (DOCTOR, POLICE ETC.)

G.K-

- FREEDOM FIGHTERS PLAYED AN IMPORTANT ROLE IN FREEDOM STRUGGLE. PASTE THE PICTURE OF ANY ONE FREEDOM FIGHTER ON A4 SIZE SHEET AND WRITE FEW LINES ABOUT THEM.
- MAKE A POSTER ON WOMEN EMPOWERMENT WRITE THE SLOGAN

COMPUTER-

- PASTE THE PICTURE OF INPUT AND OUTPUT DEVICES IN YOUR NOTEBOOK
- IPO (INPUT PROCESS OUTPUT) CYCLE IS ALSO USED IN OUR DAILY LIFE. WRITE AT LEAST TWO EXAMPLES OF IPO CYCLE IN OUR LIFE.

DRAWING-

- DECORATE THE COVER PAGE OF YOUR HOLIDAY HOMEWORK NOTEBOOK
- MAKE A WALL HANGING USING WASTE MATERIAL

हिंदी-

- किन्ही 10 खेलों के नामों को वर्णमाला के क्रमानुसार पुस्तिका में लिखिए !
- भारत में मनाए जाने वाले विभिन्न त्योहारों में से किसी एक त्योहार का सुन्दर पोस्टर बनाए !
- योग का महत्व विषय पर एक पोस्टर बनाए !
- आपने गर्मी की छुट्टी किस प्रकार बिताई 10 पंक्तियों में लिखकर बताएं!

WORKSHEET NO-1

ENGLISH

- A) There are fifteen nouns in the crossword. Find them and write in your notebook. Also mention the kind of nouns and write in front of them

Z	G	C	F	B	E	A	R	Y	Z	U
Y	I	L	B	A	W	S	C	N	E	T
R	B	O	O	K	A	B	F	U	B	P
L	R	W	A	I	T	E	R	T	R	S
B	W	N	T	A	C	A	O	S	A	U
M	A	Y	L	T	H	C	G	E	K	N
X	U	F	N	Z	N	H	Q	V	J	D
F	G	A	R	D	E	N	N	T	P	A
M	X	N	S	C	H	O	O	L	M	Y

- B) Fill in the blanks with the Proper Nouns

- 1- Wednesday comes between _____ and _____.
- 2- River _____ flows through Delhi.
- 3- _____ is the seventh month of the year.
- 4- The Eiffel Tower is in _____.
- 5- Jesus Christ's birthday is celebrated as _____.
- 6- _____ is the capital of India.

- C) Fill in the blanks with appropriate Collective Noun

Crew collection herd bundle team gang swarm committee

1. Mr Soni has a large of _____ stamps.
2. Rahul carried the _____ of clothes on his shoulders.
3. The police have identified the _____ of robbers responsible for the robbery in our neighbourhood.
4. There are eleven players in a cricket _____.
5. The speeding truck was stopped by _____ a of cows.
6. There was a of bees in my garden.
7. The managing _____ will hold its meeting in the month of September.
8. The _____ of sailors had to face a storm in the sea.

D) Rewrite the sentences replacing the underlined nouns with the opposite genders Make necessary changes.

1- My sister is a very talented actress.

2-The boy played the role of the king in the play.

3- The princess fell off the horse.

4- The shepherd had many sheep.

5- The wizard played many tricks.

6- The lion lay alone in the den.

7- This cow belongs to my aunt.

8- Girls can sit in the women's lounge.

कार्यपत्रिका-1

हिंदी

1. भाषा और लिपि का सही मिलान कीजिए -

भाषा का नाम	लिपि का नाम
(क) संस्कृत	1. फ़ारसी
(ख) अंग्रेजी	2. देवनागरी
(ग) पंजाबी	3. रोमन
(घ) उर्दू	4. गुरुमुखी

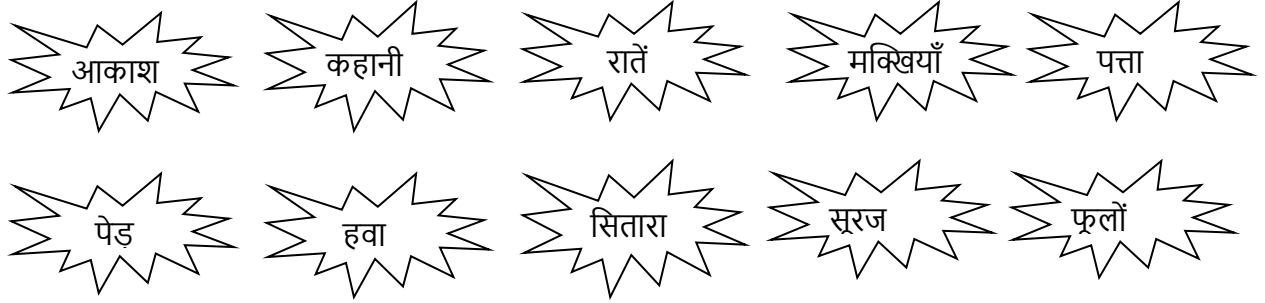
2. नीचे दिए शब्दों को चुनकर सही सूची बनाएँ -

बैल	सहेली	चिड़ा	महारानी	भाभी
चुहिया	कुत्ता	बकरी	सिंह	धोबी

स्त्रीलिंग

पुल्लिंग

3. एकवचन शब्दों को हरे रंग से और बहुवचन शब्दों को पीले रंग से रंग भरें-



4. निम्नलिखित गद्यांश को ध्यानपूर्वक पढ़ो और पूछे गए प्रश्नों के सही उत्तर के सामने निशान (✓) लगाओ।

पटाखा लेकर कमल बाजार से लौटा। महेश ने माचिस रवि को पकड़ाई और स्वयं डिब्बा लेकर बम के पास खड़ा हो गया। सुदीप थोड़ी दूर खड़ा, साँस रोके सारी कार्यवाही देखता रहा। रवि ने माचिस जलाई और बम की बत्ती में छुआ दी। महेश ने झुककर डिब्बा बम के ऊपर रख दिया, किंतु वह सीधा होकर सामने से हटता, इससे पहले ही विस्फोट हो गया। डिब्बा उछलकर महेश के माथे से टकराया और खून से तर-बतर चेहरा लिए वह चकराकर गिर पड़ा। यह देखकर कुक्कू और सभी डर गए। वे घायल महेश को छोड़कर सरपट भाग निकले।

महेश को असहाय देख, सुदीप को बड़ी दया आई। वह उसके पास आया। माथे पर गहरा घाव था। खून रोकने के लिए उसने कसकर अपना रूमाल उसके माथे पर बाँध दिया। दौड़कर सड़क से रिक्शा लाया और चालक की सहायता से महेश को रिक्शे पर बैठाकर घर पहुँचाया।

महेश के पापा उसे अस्पताल ले गए। वहीं थोड़ी देर बाद उसे होश आया। धीरे-धीरे पिछली बातें याद आईं। मम्मी-पापा से घर तक पहुँचने की कहानी भी मालूम हुई। सारी बातें जानकर वह सुदीप के प्रति कृतज्ञता से भर उठा। वह समझ गया कि सुदीप ही उसका सच्चा मित्र है।

(क) पटाखा लेकर कौन आया था?

- (1) कमल ☐
- (2) रवि ☐
- (3) महेश ☐
- (4) सुदीप ☐

(ख) डिब्बा उछलकर महेश के कहाँ लगा?

- (1) माथे पर ☐
- (2) हाथ पर ☐
- (3) पेट पर ☐
- (4) पैर पर ☐

(ग) सुदीप ने महेश के माथे से बहते खून को रोकने के लिए क्या किया?

(1) महेश को सीधा लिटा दिया।

☐

(2) कसकर अपना रूमाल महेश के माथे पर बाँधा।

☐

(3) महेश को अस्पताल ले गया

☐

(4) माथे पर हल्दी लगा दी।

☐

(घ) महेश क्या समझ गया ?

(1) सुदीप अच्छा लड़का नहीं है।

☐

(2) रवि और कमल उसके सच्चे मित्र हैं।

☐

(3) रवि ने उसकी जान बचाई है।

☐

(4) सुदीप ही उसका सच्चा मित्र है।

☐

कार्यपत्रिका -2


1. चित्र देखकर राज्य का नाम पहचानो और चित्र के नीचे उस राज्य की भाषा के नाम चुनकर लिखिए

बांग्ला

पंजाबी

राजस्थानी

तमिल



2. चित्र देखकर उसके नाम में सही स्थान पर अनुस्वार (ं) या (5) चंद्रबिंदु लगाइए



बदर



चाद



झड़ा

3. उचित मात्राएँ लगाकर पशु - पक्षियों के नाम पूरे कीजिए!



त त



भ ल



ह थ

4. प्रत्येक के तीन-तीन नाम संज्ञा शब्द लिखिए-





5. चित्रों को पहचानिए और लिखिए कि वे स्त्रीलिंग है या पुल्लिंग है -



MATHS

Worksheet 1

1. Circle the largest number

a) 526 517 562 518

b) 3298 3169 3578 3346

2. Write the place value and face value of each digit in the following numbers

a) 5467

b) 2583

3. Put the correct sign $>$, $<$ or $=$.

a. 3,678 _____ 5,869

b. 1,359 _____ 1,245

c. 6,891 _____ 9,895

4. Write each of the following in the expanded form.

a) 7651= _____

b) 8093= _____

5. Write the numeral for each of the following

a) Seven thousand eight hundred and ninety-two

b) Five thousand six hundred and twenty-one

c) Nine thousand nine hundred and ninety-nine

6. Arrange each of the following in ascending order.

a) 1,112, 336, 9,001, 8,213 _____

b) 5,539, 5,583, 5,577, 5,561 _____

7. Arrange each of the following in descending order.

a) 5112, 3374, 5081, 3643 _____

b) 3906, 4533, 5577, 5460 _____

Worksheet-2

Q.Fill in the blanks

1. The smallest 1 digit number is _____.
2. The largest 1 digit number is _____.
3. The smallest two digit number is _____.
4. The largest two digit number is _____.
5. The smallest three digit number is _____.
6. The largest three digit number is _____.
7. The smallest four digit number is _____.
8. The largest four digit number is _____.
9. 1 Ten = _____ ones.
10. 1 Hundred = _____ Tens.
11. 10 Hundreds = _____ Thousand.
12. The smallest 5 digit number is _____.
13. A number written in figures is the _____.
14. A number written in words is the _____.
15. The successor of 999 is _____.
16. The predecessor of 7390 is _____.
17. The place value of 5 in 6538 is _____.
18. The place value of zero is _____.
19. The face value of 7 in 6378 is _____.
20. The number just before 2000 is _____.
21. A number that comes just after a given number is called its _____.
22. The successor of a number is _____ greater than the number.
23. A number that comes just before a given number is called its _____.
24. The predecessor of a number is _____ less than the number.
25. The successor of 3999 is _____.

EVS

WORKSHEET 1





Q1. Fill in the blanks.

1. Some old people live in _____
2. People who cannot see, hear or speak are called _____
3. Blind people read from a script called _____
4. Children who do not have parents are called _____
5. When a child lives only with one parent, it is called _____

Q2. "Family Respect Chart"

Make a chart listing ways you can show respect to your family members.
Value learned through the activity: Respect

Q3. Match the pictures with the actions.

1. Helping old person cross the road.	
2. Enjoying picnic with old people	
3. Listening to a story from the grandparents.	
4. Offering a seat for an elderly person	

Q4. Read the clues and answer.

1. Your father's father is your _____
2. Your sister is your _____
3. If you are a boy, you are your parent's _____

4. Your mother's brother is your _____
5. Your grandparent's form _____ generation.

Q5. Read the given situations and give appropriate answers.

1. Jiya has a disability. She was born without hands and she uses her foot to write. Whenever the teacher is not in class Molly would laugh at her and make fun of her. Is her behavior towards Jiya correct? What would you have done?
ANS. _____
2. Deena is a blind girl who started a new school. She bumped into Gia by mistake and asked her to take her to the Principal's office. Gia replied, "sure" and took the blind girl to the toilet and left her there. Is Gia's behavior towards Deena correct? What would you have done?
ANS. _____

Q4. Read the clues and answer correctly.

1. Hi! My name is Tanu. I am 10 years old. I have a nice family. have a mother, father, brother, grandfather, grandmother and an aunt. We all live together happily in one house. What type of family have I got?
ANS. _____
2. Hello! I am Ria. My father's mother reads stories to me. I love going for a walk with her. She often makes yummy food for me. I spend time with her. What relation does she have with me?
ANS. _____
3. Hi! I am Kunal. I am going for a picnic with my uncle and aunt's children. We often go out for outings and celebrate our birthdays together. We like to play games and paint together. What relation do their children have with me?
ANS. _____

WORKSHEET-2

Q1. Tick the correct answer

- (1) Your brother/sisters is your
(a) Cousin (b) Sibling (c) spouse
- (2) Braille script is used by the:
(a) deaf (b) dumb. (c) blind
- (3) Rice, wheat and pulses are:
(a) Seeds. (b) Fruits. (c) Vegetables
- (4) Uncle and aunt's children are called
(a) Siblings. (b) Cousins. (c) sister
- (5) Famous south Indian dish:
(a) Idli (b) dosa (c) Both

Q2. Match the following:

Our Food
Match the item of food to where it comes from.



LIVEWORKSHEETS

Q3. Draw a curve in 😬 to make a 😊 for the things you should do and 😞 for the things you should not do.

- (a) Spend time with your sick grandfather.
(b) You should not respect your elders
(c) We should not waste food
(d) Take pity on the physically challenged
(e) We should take balance diet

Q4. Name the following

- (a) Two babies born at the same time to a mother
- (b) Script used by blind people, is called
- (c) People who eat only plant and milk products are known as
- (d) Mother of your father is your
- (e) Food that is eaten popularly in a particular area, is called

Q5. Find seven relationship in the word grid and encircle them

M	O	T	H	E	R	U	S
X	C	O	U	S	I	N	I
Z	Y	T	T	A	P	C	S
I	I	W	K	U	H	L	T
O	F	I	W	N	A	E	E
G	S	F	A	T	V	Q	R
Z	V	E	H	S	O	N	M

COMPUTER

Topic: Computer Hardware & Software

Q1. Fill in the blanks:

1. A _____ is an electronic machine that takes instructions from us and gives the result after processing.
2. All the physical parts that can be touched and are attached to the computer are called _____
3. Set of instructions that tell the computer how to do a particular task are called _____
4. The hardware components that allow you to enter data and instructions into a computer is called an- _____ device.
5. The hardware component that shows you the final result is called an _____ device
6. Input device with many small buttons to enter data into the computer is called a _____
7. Input device that fits under the palm of your hand is _____
8. The main storage device that a computer uses to store information is the _____
9. A printer gives us a _____ copy in the computer.
10. _____ - is called the brain of the computer.

Q2. Name two types of Computer:

- a. _____ b. _____

Q3. Name any two:

(a) Hardware: _____

(b) Software: _____

Q4. A computer works on the following principle:

INPUT > _____ > OUTPUT

G.K Worksheet

Q.1. Complete the following with the help of clue box:

Hawa Mahal post office Green sorry bank

- a) _____ is the place where we deposit our money.
- b) We go to _____ post our Letters.
- c) I am _____ for coming late.
- d) _____ to post our Letters.
- e) _____ color stands for fertility and growth in the flag of India.

Q.2. Identify the following historical monuments:

