




B.M. BHARTI MODEL SCHOOL

(A Senior Secondary School)
(Recognized and Affiliated to CBSE)
Majri, Delhi - 110081

WINTER BREAK HOMEWORK

SESSION : 2024 - 25



CLASS & SECTION : IV

STUDENT'S NAME : Y

FATHER'S NAME : _____

ROLL NO. : _____





B.M. BHARTI MODEL SCHOOL

(A Senior Secondary School)
(Recognised and Affiliated to CBSE)
Majri, Delhi - 110081

CLASS - IV
SUBJECT - ENGLISH
WORKSHEET - 1

Ques 1. Change the sentence according to the given instructions.

1. Birds fly in the Sky . (Present continuous)

2. We are having our dinner. (Past continuous)

3. I am playing the guitar. (Past continuous)

4. I was writing a letter to my cousin. (Present continuous)

Ques 2. Complete the passage using suitable prepositions.

Shanky went _____ the beach and made a castle _____ sand . The waves came _____ and washed _____ the castle. Hw thought _____ a while and started _____ make it again.

Ques 3. Punctuate the following sentence and rewrite also.

1. Where did you go

2. her father is an intelligent loving and caring person

Ques 3. Pick out the Adjectives and state their kinds.

1. I have some food in my tiffin.

2. Akshay is a good actor.

Ques 4. Tick the correct conjunction.

- 1 Is this question easy (or / but) difficult?
- 2 Go to visit a doctor (and / because) you have a fever.

Ques 5. Translate into English .

1. राधा स्टेज पर नाच रही है।

2. मोहन कपड़े धो रहा था।

3. वे पार्क में खेल रहे थे।



B.M. BHARTI MODEL SCHOOL

(A Senior Secondary School)
(Recognised and Affiliated to CBSE)
Majri, Delhi - 110081

SUBJECT - ENGLISH
CLASS IV
WORKSHEET - 2

A. Circle the adverbs in the following sentences.

1. He swam quickly and won the competition.
2. I will be there soon.
3. She is somewhat annoyed.
4. They decorated the building beautifully.
5. The tortoise headed to the finish line slowly.
6. I hardly attend any public function.
7. They accepted the invitation happily.
8. The train to Nasik crosses this station frequently.

2. Complete these sentences with the adverbs from the box.
(perfectly, outside, now, finally, forward, happily, hastily soon)

1. The class will finish this worksheet _____
2. Children like to play _____
3. He kicked the football _____
4. I want _____ a cleaned room
5. I _____ received my salary.
6. She left the workplace _____ when she heard of accident.
7. Your hard work will be awarded. _____
8. The child played _____ on the grandfather's lap.



B.M. BHARTI MODEL SCHOOL

A Senior Secondary School
Recognised and Affiliated to CBSE
Majri, Delhi – 110081

WORKSHEET - 1
SUBJECT- SCIENCE

CLASS - IX

FATHER'S NAME : _____

NAME : _____

Q1) Multiple Choice Questions .

1 The resources that we get from the nature are called:

- (a) Human resources (b) Natural resources (c) Man-made resources

2 Which of the following causes water pollution?

- (a) Industrial and household wastes (b) Building dams (c) None of these

3 Which pollution is caused by dumping of wastes such as plastic bags, glass bottles and metal containers

- (a) Air pollution (b) Water pollution (c) Soil pollution

4 Gaseous discharge from industries causes

- (a) Water pollution (b) Soil pollution (c) Air pollution



Q2) Fill in the blanks:

- a. The mixing of harmful substances with soil is called _____.
- b. The surrounding in which we live is called the _____.
- c. _____ are the wild plants that grow in an unwanted place.
- d. The harmful changes brought in the environment by _____ and _____.

Q3) write 'T' for true and 'F' for false statements:

- a. Soil can be conserved by planting more trees and building dams across the rivers to stop flood.
- b. Tall chimneys with filters must be fitted in factories to release smoke.
- c. We must throw garbage into water bodies.
- d. Resources are vital for us.
- e. We should keep domestic wastes in dustbin.

Q4) Tick the pictures that show people respect their community and keeping it clean.





B.M. BHARTI MODEL SCHOOL

(A Senior Secondary School)
(Recognised and Affiliated to CBSE)

WORKSHEET - 2 SUBJECT- SCIENCE CLASS - IV

FATHER'S NAME : _____

NAME : _____

Q1) Multiple Choice Questions.

1. A force is a _____ or a _____ acting on an object.
a) Push, run b) Pull, lift c) Push, pull
2. When we throw a ball upward, it comes down on its own due to _____.
a) Muscular force b) Frictional force c) Gravitational force
3. The force used to do a work by using a tool or instrument is called _____.
a) Muscular force b) Mechanical force c) Frictional force
4. Force is required to _____.
a) Stop object b) Move object c) Both a & b


Q2) Fill in the blanks:


1. The force applied by our muscles to do a work is called _____.
2. The ability to do work is called _____.
3. The energy obtained from sun is called _____.
4. The energy obtained from water is called _____.
5. _____ makes our job easier and faster.

Q3) Write 'T' for true and 'F' for false statements:

1. The sun is a source of energy.
2. We can make electricity from falling water.
3. Work is done when you push a mountain.
4. Work is done when cloth dries in the sun.
5. Frictional force slow down the movement of an object or stop it completely.

Q4) Observe the pictures carefully, and write down which force is used in the activity (PUSH/PULL).

























B.M. BHARTI MODEL SCHOOL

(A Senior Secondary School)
(Recognised and Affiliated to CBSE)
Majri, Delhi - 110081

SUBJECT - S.SCIENCE

CLASS IV

WORKSHEET - 1 (on Industries)

Q-1. Fill in the blanks:

1. The process of making goods and services is known as _____.
2. _____ are the large factories where goods are produced in large quantities.
3. _____ industries are related to the extraction of raw materials like minerals, oil, and coal.
4. _____ industries turn raw materials into finished goods, such as making clothes from cotton.
5. _____ industries include businesses that provide services such as banking, education.

Q-2. Answer the following questions:

1. What is an industry?

2. Name two types of industries.

Q-2 . True or False:

1. The mining industry extracts minerals from the Earth. (True / False)
2. The textile industry makes food products. (True / False)
3. The service industry includes industries like banking and tourism. (True / False)
4. The agricultural industry deals with making machines. (True / False)

Bonus Activity:

Draw a picture of a factory in any industry (e.g., textile, mining, or agricultural) and label the important parts.



B.M. BHARTI MODEL SCHOOL

(A Senior Secondary School)
(Recognised and Affiliated to CBSE)
Majri, Delhi - 110081

SUBJECT - S.SCIENCE CLASS IV WORKSHEET - 2

Q-1: Fill in the Blanks

1. Forests are home to many different types of _____.
2. Trees in forests help to clean the _____ by absorbing carbon dioxide.
3. A _____ is a group of animals living in a particular habitat.
4. Animals like tigers, lions, and elephants are called _____ animals.
5. _____ is an example of a forest that is found near the equator and has a lot of rainfall.

Q-2: True or False

1. Forests are important for maintaining the balance of the Earth's ecosystem. (True/False)
2. All forests are the same. (True/False)
3. Some animals live only in forests, while others can live in grasslands, deserts, and other places. (True/False)
4. Trees in the forest produce oxygen, which is necessary for humans and animals. (True/False)
3. A zoo is a natural habitat for wild animals. (True/False)

Q-3: Match the Followings.

- | | |
|--------------------|--|
| 1. Scavenger | a. Home to a variety of animals and plants |
| 2. Deciduous trees | b. Eats dead and decaying animals |
| 3. Herbivores | c. Animals that only eat plants |
| 4. Forest. | d. Found near the equator with lots of rainfalls |

Q-4 What do you think would happen if forests were destroyed?

Q 5: Draw a Picture

Draw a simple forest scene with animals (e.g., trees, birds, and any wildlife) in



B.M. BHARTI MODEL SCHOOL

(A Senior Secondary School)
(Recognised and Affiliated to CBSE)
Majra, Delhi - 110081

SUBJECT - MATHS
CLASS IV
WORKSHEET - 1

Q1. Write the number names for these numerals:

a) 2,22,222 = _____

b) 8,76,000 = _____

Q2. Fill in the blanks:

a) The greatest 4-digit numeral is _____

b) The numeral just before 80,000 is _____

c) The places ones, tens & hundreds belongs to period.

d) $50,000 + 2,000 + 100 + 30 + 4 =$ _____

e) Compare: 6,99,569 _____ 6,96,965 (<, =, >)

f) The place just to the left of the hundreds place is _____

g) The place value of 7 in 8,76,403 is _____

h) A 5-digit number begins with _____ place

Q3. Write the number name for these numerals

a) 67,98,345 - _____

b) 1,00,987 - _____

c) 54,00,909 - _____

d) 45,00,088 - _____

Q4. Convert the following:

a) 76 km into m. b) 54896 m into km

d) 45 L into ml. d) 678950 ml into L



B.M. BHARTI MODEL SCHOOL

(A Senior Secondary School)
(Recognised and Affiliated to CBSE)
Majri, Delhi - 110081

SUBJECT - MATHS
CLASS IV
WORKSHEET - 2

Part 1: Measuring Length (Using Meters and Centimeters)

1. Convert the following:

(a) 3 meters = _____ centimeters. (b) 150 centimeters = _____ meters

Word problem:

Ravi bought 35 m cloth of blue colour and 45 m 56 cm cloth of yellow colour. What is the total length of cloth he purchased?

Part 2: Measuring Weight (Using Kilograms and Grams). Convert the following.

(a) 27 kilograms = _____ grams. (b) 56800 grams = _____ kilograms

Word Problem:

A packet of sugar weighs 500 grams. If you have 4 packets of sugar, what is the total weight in kilograms?

Part 3: Measuring Volume (Using Liters and Milliliters) Convert the following:

(a) 56 liter = _____ milliliters. (b) 250 milliliters = _____ Litre

Word Problem:

You have a bottle with 2 liters of juice. If you drink 400 milliliters, how much juice is left in the bottle?

Part 4: Which unit of measurement would you use for each of the following?

The height of a tree: _____ (Meter/Centimeter)

The weight of a person: _____ (Kilogram/Gram)

The amount of milk in a jug: _____ (Liter/Milliliter)

The length of a classroom: _____ (Meter/Centimeter)

Part 5: Activity - Draw a robot using different shapes. Colour it with your own

बी.एम. भारती मॉडल स्कूल

मजरी (डी- ब्लॉक, रामा विहार) दिल्ली- 110081
विषय- हिन्दी कार्यपत्रक (WORKSHEET) -1
नाम- रोल न०- कक्षा- चौथी

प्र०:- सही उत्तर पर (✓) निशान लगाइए :-

पूर्णविराम : (।)

1. इस चिह्न का प्रयोग कहाँ किया जाता है :-

- (अ) वाक्य के अंत में () (ब) सवाल पूछने के लिए ()
(स) किसी का नाम लिखने के लिए ()

अल्पविराम : (,)

2. इनमें से कौन सा वाक्य अल्पविराम के साथ सही है ?

- (अ) मैं किताब, कलम और रबड़ लाया हूँ। ()
(ब) मैं किताब, कलम और रबड़ लाया हूँ। ()

3. प्रश्नवाचक चिह्न : (?)

इस चिह्न का प्रयोग कब किया जाता है ?

- (अ) सवाल पूछने के लिए ()
(ब) वाक्य को समाप्त करने के लिए ()
(स) किसी का नाम लिखने के लिए ()

4. विराम चिह्नों का प्रयोग भाषा के किस रूप में होता है ?

- (अ) लिखित () (ब) मौखिक () (स) सांकेतिक ()

5. हर्ष, शोक, आश्चर्य संबोधन के लिए कौन सा चिह्न लगाया जाता है ?

- (अ) ? () (ब) ! () (स) । ()

कार्यपत्रक (WORKSHEET) 2

अपठित गद्यांश

प्र०:- निम्नलिखित अपठित गद्यांश को पढ़कर पूछे गए प्रश्नों के उत्तर लिखिए:-

कार्टूनों की अपनी दुनिया है, ठीक मनुष्यों की दुनिया की तरह लुभावनी। कार्टून ऐसा चित्र होता है, जिसे देखकर मन खुश हो जाता है। आजकल तो कार्टूनों के माध्यम से अनेक तरह के रोचक कार्यक्रम दिखाए जाने लगे हैं। कार्टून बच्चों को ही नहीं बड़ों को भी अच्छे लगते हैं। नीरस और उबाऊ विषय भी कार्टून के द्वारा सरस व रोचक बन जाते हैं। इसलिए बच्चे कार्टून की किताब मिलते ही उस पर झपट पड़ते हैं और जब तक वह खत्म न हो जाए, पढ़ना, खेलना, सोना यहाँ तक कि खाना भी भूल जाते हैं। जब ये कार्टून दूरदर्शन पर दिखाए जाते हैं तो इन जीते-जागते, हँसते-बोलते कार्टूनों में सब खो जाते हैं।

1. कार्टून क्या होते हैं?

2. कार्टून की दुनिया कैसी होती है?

3. कार्टून सबको इतने अच्छे क्यों लगते हैं?

4. कैसे पता चलता है कि बच्चे कार्टून पसंद करते हैं?

वाक्य बनाइए:-

अ) सरस -

ब) हँसते - हँसते -

स) दुनिया -

द) रोचक -